

MAFS.3.NBT.1.1- Number 1

1. Bullet 1: 232
Bullet 3: 228

2. Students will not place a range in the table; they will choose only one value.

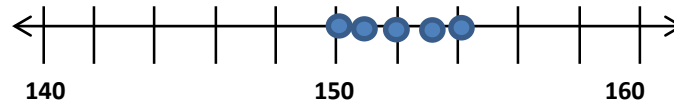
Original Number	Rounded to the Nearest Hundred
Any between number 50 - 149	100
Any between number 150 - 249	200
Any between number 50 - 149	100

3.

	340	350
346		X
354		X
343	X	

4. A. 400
B. 390

5.



Students may have some or all of the points.

MAFS.3.NBT.1.1- Number 2

1. Bullet 1: 775
Bullet 3: 841
Bullet 5: 812

2. Students will not place a range in the table; they will choose only one value.

Original Number	Rounded to the Nearest Ten
Any number between 355-364	360
Any number between 345-354	350
Any number	350

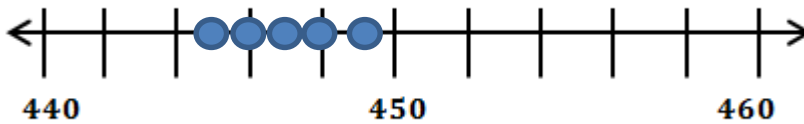
between 345-354	
-----------------	--

3.

	700	800
763		X
849		X
738	X	

4. A. 610
B. 600

5.



Students may have some or all of the points.

MAFS.3.NBT.1.1- Number 3

1. Bullet 3: 165
Bullet 5: 174

2. Students will not place a range in the table; they will choose only one value.

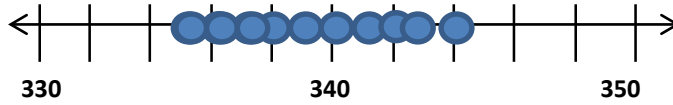
Original Number	Rounded to the Nearest Hundred
Any number between 150 - 249	200
Any number between 250 - 349	300
Any number between 150 - 249	200

3.

	620	630
632		X
623	X	
629		X

4. A: 1, 000 (ten-hundred or thousand)
 B. 990
 Explanations may vary.

5.



Students may have some or all of the points.

MAFS.3.NBT.1.1- Number 4

1. Bullet 1: 152
 Bullet 5: 228

2. Students will not place a range in the table; they will choose only one value.

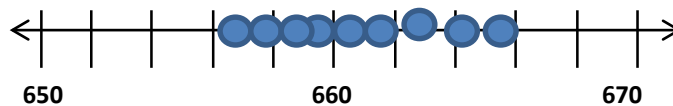
Original Number	Rounded to the Nearest Ten
Any number between 535 - 544	540
Any number between 545 - 554	550
Any number between 545 - 554	550

3.

	300	400
367		X
319	X	
417		X

4. A. 700
 B. 690

5.



MAFS.3.NBT.1.1- Number 5

1. Bullet 2: 386
 Bullet 4: 392

2. Students will not place a range in the table; they will choose only one value.

Original Number	Rounded to the

Wylie's Warm-Ups Answer Keys Grade 3: MAFS.3.NBT.1.1

	Nearest Hundred
Any number between 751 -849	800
Any number between 851 -949	900
Any number between 751 -849	800

3.

	510	500
506	X	
514	X	
498		X

4. A: 200
B: 180

5.

